




ਵੱਲ: ਸਮੂਹ ਜ਼ਿਲ੍ਹਾ ਸਿੱਖਿਆ ਅਫ਼ਸਰ (ਜੈ.ਸਿੱ/ਐ.ਸਿੱ) ਪੰਜਾਬ
ਸਮੂਹ ਸਕੂਲ ਮੁਖੀ ਪੰਜਾਬ।

ਮੀਮੋ ਨੰਬਰ: SPL-ACADEMICS

ਮਿਤੀ: 8/11/17

ਵਿਸ਼ਾ: ਨੈਸ਼ਨਲ ਅਚੀਵਮੈਂਟ ਸਰਵੇ ਦੇ ਮਹੱਤਵਪੂਰਨ ਬਿਲਊ ਪ੍ਰਿੰਟ ਵੈਬਸਾਈਟ 'ਤੇ ਅੱਪਲੋਡ ਕਰਨ ਸੰਬੰਧੀ।

ਉਪਰੋਕਤ ਵਿਸ਼ੇ ਦੇ ਸੰਬੰਧ ਵਿਚ ਦੱਸਿਆ ਜਾਂਦਾ ਹੈ ਕਿ ਤੀਜੀ, ਪੰਜਵੀਂ ਅਤੇ ਅੱਠਵੀਂ ਜਮਾਤ ਦੇ ਵਿਦਿਆਰਥੀਆਂ ਦਾ ਸਰਵੇਖਣ 13 ਨਵੰਬਰ, 2017 ਨੂੰ ਹੋਣਾ ਹੈ। ਇਸ ਸਰਵੇਖਣ ਲਈ ਨੈਸ਼ਨਲ ਅਚੀਵਮੈਂਟ ਸਰਵੇ ਦੇ ਮਹੱਤਵਪੂਰਨ ਬਿਲਊ ਪ੍ਰਿੰਟ ਵੈਬਸਾਈਟ 'ਤੇ ਅੱਪਲੋਡ ਕੀਤੇ ਜਾ ਰਹੇ ਹਨ ਇਹਨਾਂ ਨੂੰ ਵੈਬਸਾਈਟ ਤੋਂ ਡਾਊਨਲੋਡ ਕਰਕੇ ਵਿਦਿਆਰਥੀਆਂ ਨੂੰ ਇਹਨਾਂ ਦੀ ਪ੍ਰੈਕਟਿਸ ਕਰਵਾਈ ਜਾ ਸਕਦੀ ਹੈ ਤਾਂ ਜੋ ਸਰਵੇਖਣ ਵਾਲੇ ਦਿਨ ਉਹਨਾਂ ਨੂੰ ਕੋਈ ਮੁਸ਼ਕਿਲ ਨਾ ਆਵੇ।


ਡਾਇਰੈਕਟਰ
ਐੱਸ.ਸੀ.ਈ.ਆਰ.ਟੀ.
ਪੰਜਾਬ
8/11/17




Class : I (Oral testing)

Subject : Mathematics

LO : L4- Counts objects using numbers 1 to 9

Key : 7

How many cats have a tail?



Class : II (Oral testing)

Subject : Language


LO : L11– Uses prepositions like 'before', 'between' etc.

Key : b)

INSTRUCTION:

- The teacher shows a picture and asks where the child is in the picture.

Q1. Look at the picture and say where the child is.



Reema is standing _____ a chair.

a) before

b) behind

Class : III**Subject : Reading Comprehension****LO : L2– Responds to textual and other material, in oral/written forms, in English/
Braille/sign****Key : 3**

Read the following passage and encircle the answers of the questions.

You must have seen butterflies. Do you know where a butterfly comes from?

The mother butterfly lays an egg on a leaf or plant. A small caterpillar comes out of the egg.

The caterpillar eats leaves and grows bigger. Then the caterpillar attaches itself to a leaf and makes a large cocoon. This is a kind of shell that protects it from other animals. Inside the cocoon it grows wings and legs.

Finally, the cocoon opens and the new beautiful butterfly comes out. It slowly opens its wings and then it flies away.

Cocoon is a kind of

1. plant.
2. shell.
3. butterfly.

Class : III

Subject : Mathematics

LO : L1C- Solve simple real life situations/problems including money, length, mass and capacity using the four operations.


Key : 2

Your mother gave you Rs. 50. She gave the money in three notes. Which of the following shows the notes she gave?


1



2



3



Class : V


Subject : Reading Comprehension

LO : L4– Reads independently in English storybooks, news items/headlines, advertisements etc.

Key : 4

In which state the cricket club is located?

Cricket Club



Students of all classes are
welcome.
Come, let us learn cricket!
Every Sunday in the Playground

	Time
Girls	9:00 – 10:00 in the morning
Boys	10:30 – 12:00 in the morning

Sadanand Primary School
Mahatma Gandhi Road
Rampur, Uttar Pradesh

1. Sadanand
2. Mahatma Gandhi
3. Rampur
4. Uttar Pradesh

Class : V**Subject : Mathematics****LO : L1– Reads and writes numbers bigger than 1000 being used in her/his surroundings.****Key : 3**

Renu has the following four number cards:

7	5	8	6
---	---	---	---

Which is the largest 4-digit number she can make using all cards?

1. 5786
2. 8576
3. 8765
4. 9999

Class : VIII

Subject : Reading Comprehension


LO : L1- Responds to an advertisement (Grasp ideas)

Key : 3

Read the following advertisement and answer the questions that follow:

Yellow Peas Dal

A Nutritious and Healthy diet at a reasonable cost




Benefits of Yellow Peas Dal


It's an excellent source of :


- Proteins • Carbohydrates
- Fibre... and other benefits


(as per the study conducted by
Central Food Technology Research Institute, Mysore
- Report can be accessed at www.fcamin.nic.in)

Available in Delhi at outlets of



 Kendriya Bhandar &

 NCCF NCCF Counters

 NAFED* &


 Mother Dairy Booths*

* To be available shortly

Consumers ! For online complaint filing log on to : www.core.nic.in or call at toll free No. 18001804566

Consumers ! For any help/clarification, feel free to call
National Consumer Help Line No. 18000114000
(Toll free : Monday - Saturday 9.30 a.m. to 5.30 p.m.)
011-27652955, 56, 57, 58 (Normal Call Charges Apply)




Issued in Public Interest by:
Government of India
Ministry of Consumer Affairs, Food and Public Distribution
Department of Consumer Affairs,
Krishi Bhawan, New Delhi-110001

Yellow peas dal should be consumed because it is

1. easily available.
2. advocated by the government.
3. healthy and nutritious.
4. yellow in colour.

Class : VIII**Subject : Mathematics****LO : L11– Interprets the pie chart****Key : 2**

The following pie chart represents marks in percent scored by a student in five subjects. In which subject the student gets minimum marks?



1. English
2. Hindi
3. Maths
4. Science